

Name:

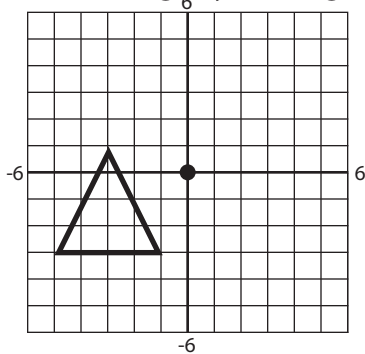
Math 1

Date:

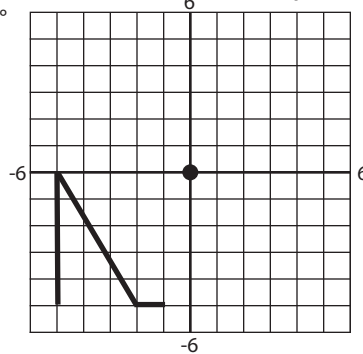
Practice Quiz 7-C

1. Sketch the image by rotating the pre-image counterclockwise around the centerpoint by the amount stated.

a) 90°



b) 180°



2. Write the coordinates of the point $(1, -2)$ rotated counterclockwise around the origin by the amount stated.

a) 90°

b) 180°

c) 270°

d) 360°

Name:

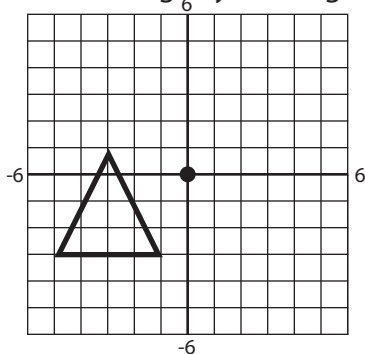
Math 1

Date:

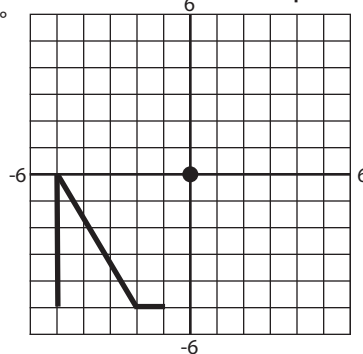
Practice Quiz 7-C

1. Sketch the image by rotating the pre-image counterclockwise around the centerpoint by the amount stated.

a) 90°



b) 180°



2. Write the coordinates of the point $(1, -2)$ rotated counterclockwise around the origin by the amount stated.

a) 90°

b) 180°

c) 270°

d) 360°