

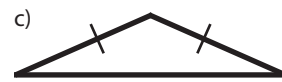
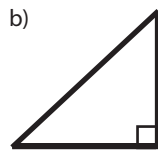
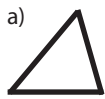
Name:

Math 1

Date:

Practice Quiz 8-A

1. Identify whether the following triangles are acute, right, or obtuse, and whether they are scalene, isosceles, or equilateral.



2. Sketch two different examples of each of the following, or write *not possible*. Include any necessary markings.

a) acute scalene

b) right isosceles

c) scalene isosceles

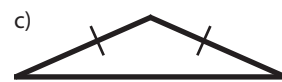
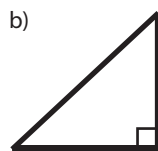
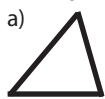
Name:

Math 1

Date:

Practice Quiz 8-A

1. Identify whether the following triangles are acute, right, or obtuse, and whether they are scalene, isosceles, or equilateral.



2. Sketch two different examples of each of the following, or write *not possible*. Include any necessary markings.

a) acute scalene

b) right isosceles

c) scalene isosceles