

Name:

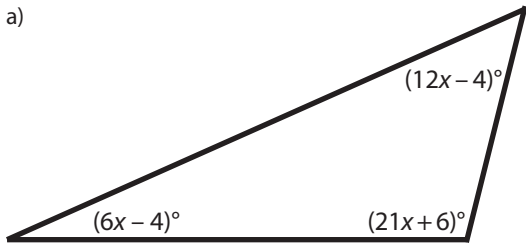
Math 1

Date:

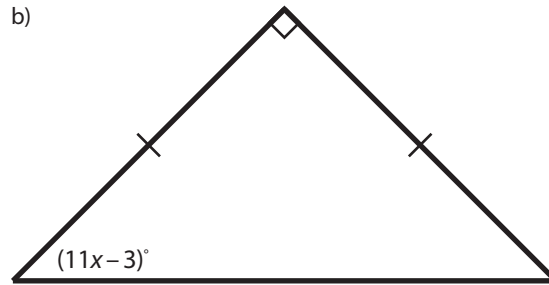
Practice Quiz 8-B

1. For each triangle, write and solve an equation to find the value of x . Round to the nearest hundredth.

a)



b)



Name:

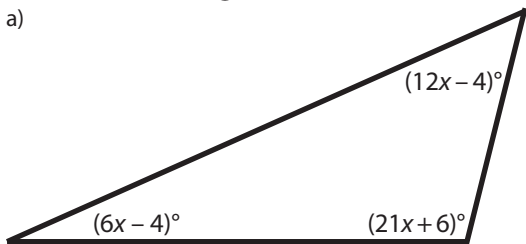
Math 1

Date:

Practice Quiz 8-B

1. For each triangle, write and solve an equation to find the value of x . Round to the nearest hundredth.

a)



b)

