

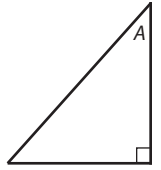
Name:

Math 2

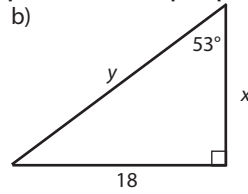
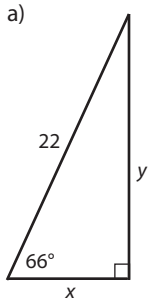
Date:

Practice Quiz 4-C

1. The sine of  $\angle A$  in the triangle at right is  $\frac{2}{3}$ . What does this mean about the sides of the triangle?



2. For each variable, write and solve a trigonometric equation. Use proper notation, and only write equations.



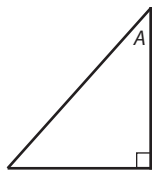
Name:

Math 2

Date:

Practice Quiz 4-C

1. The sine of  $\angle A$  in the triangle at right is  $\frac{2}{3}$ . What does this mean about the sides of the triangle?



2. For each variable, write and solve a trigonometric equation. Use proper notation, and only write equations.

